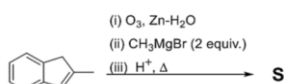
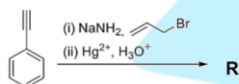
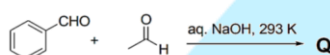
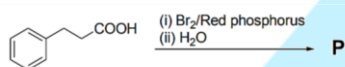


Chemistry

SECTION 1 (Maximum Marks: 12)

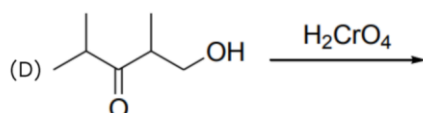
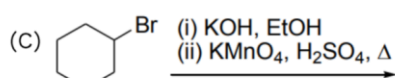
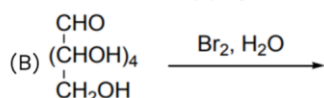
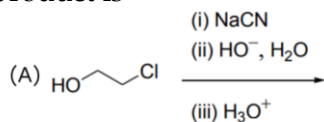
- This section contains **FOUR (04)** questions.
- Each question has **FOUR** options (A), (B), (C) and (D). **ONLY ONE** of these four options is the correct answer.
- For each question, choose the option corresponding to the correct answer.
- Answer to each question will be evaluated according to the following marking scheme:
 Full Marks : +3 If **ONLY** the correct option is chosen;
 Zero Marks : 0 If none of the options is chosen (i.e. the question is unanswered);
 Negative Marks : -1 In all other cases.

- During sodium nitroprusside test of sulphide ion in an aqueous solution, one of the ligands coordinated to the metal ion is converted to
 (A) NOS^- (B) SCN^- (C) SNO^- (D) NCS^-
- The complete hydrolysis of ICl , ClF_3 and BrF_5 , respectively, gives
 (A) IO^- , ClO_2^- and BrO_3^- (B) IO_3^- , ClO_2^- and BrO_3^-
 (C) IO^- , ClO^- and BrO_2^- (D) IO_3^- , ClO_4^- and BrO_2^-
- Monocyclic compounds P, Q, R and S are the major products formed in the reaction sequences given below.



The product having the highest number of unsaturated carbon atom(s) is

- (A) P (B) Q (C) R (D) S
- The correct reaction/reaction sequence that would produce a dicarboxylic acid as the major product is



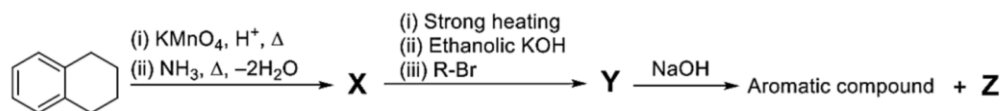
SECTION 2 (Maximum Marks: 12)

- This section contains **THREE (03)** questions.
- Each question has **FOUR** options (A), (B), (C) and (D). **ONE OR MORE THAN ONE** of these four option(s) is(are) correct answer(s).
- For each question, choose the option(s) corresponding to (all) the correct answer(s).
- Answer to each question will be evaluated according to the following marking scheme:

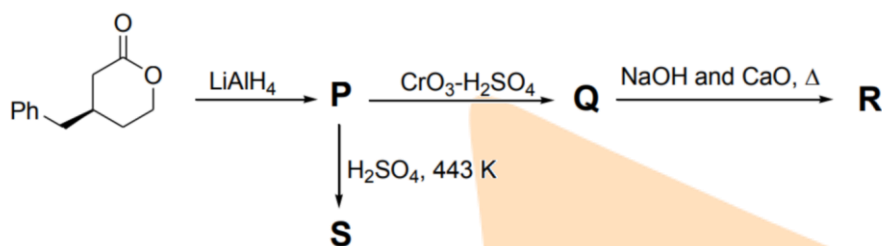
Full Marks	: +4	ONLY if (all) the correct option(s) is(are) chosen;
Partial Marks	: +3	If all the four options are correct but ONLY three options are chosen;
Partial Marks	: +2	If three or more options are correct but ONLY two options are chosen, both of which are correct;
Partial Marks	: +1	If two or more options are correct but ONLY one option is chosen and it is a correct option;
Zero Marks	: 0	If none of the options is chosen (i.e. the question is unanswered);
Negative Marks	: -2	In all other cases.
- For example, in a question, if (A), (B) and (D) are the **ONLY** three options corresponding to correct answers, then
 - choosing **ONLY** (A), (B) and (D) will get +4 marks;
 - choosing **ONLY** (A) and (B) will get +2 marks;
 - choosing **ONLY** (A) and (D) will get +2 marks;
 - choosing **ONLY** (B) and (D) will get +2 marks;
 - choosing **ONLY** (A) will get +1 mark;
 - choosing **ONLY** (B) will get +1 mark;
 - choosing **ONLY** (D) will get +1 mark;
 - choosing no option (i.e. the question is unanswered) will get 0 marks; and choosing any other combination of options will get -2 marks.

5. The correct statement(s) about intermolecular forces is(are)
- (A) The potential energy between two point charges approaches zero more rapidly than the potential energy between a point dipole and a point charge as the distance between them approaches infinity.
- (B) The average potential energy of two rotating polar molecules that are separated by a distance r has $1/r^3$ dependence.
- (C) The dipole-induced dipole average interaction energy is independent of temperature.
- (D) Nonpolar molecules attract one another even though neither has a permanent dipole moment
6. The compound(s) with P–H bond(s) is(are)
- (A) H_3PO_4 (B) H_3PO_3 (C) $\text{H}_4\text{P}_2\text{O}_7$ (D) H_3PO_2

7. For the reaction sequence given below, the correct statement(s) is(are)



- (A) Both X and Y are oxygen containing compounds.
(B) Y on heating with CHCl_3 / KOH forms isocyanide.
(C) Z reacts with Hinsberg's reagent.
(D) Z is an aromatic primary amine.
8. For the reaction sequence given below, the correct statement(s) is(are)



- (A) P is optically active.
(B) S gives Bayer's test.
(C) Q gives effervescence with aq. NaHCO_3 .
(D) R is an alkyne.

SECTION 3 (Maximum Marks: 24)

- This section contains SIX (06) questions.
- The answer to each question is a NUMERICAL VALUE.
- For each question, enter the correct numerical value of the answer using the mouse and the onscreen virtual numeric keypad in the place designated to enter the answer. If the numerical value has more than two decimal places, truncate/roundoff the value to TWO decimal places.
- Answer to each question will be evaluated according to the following marking scheme:
Full Marks: +4 ONLY if the correct numerical value is entered;
Zero Marks: 0 In all other cases.

9. The density (in gcm^{-3}) of the metal which forms a cubic close packed (ccp) lattice with an axial distance (edge length) equal to 400 pm is_____.
- Use: Atomic mass of metal = 105.6 amu and Avogadro's constant = $6 \times 10^{23} \text{ mol}^{-1}$
10. The solubility of barium iodate in an aqueous solution prepared by mixing 200 mL of 0.010 M barium nitrate with 100 mL of 0.10 M sodium iodate is $X \times 10^{-6} \text{ mol dm}^{-3}$. The value of **X** is
- Use: Solubility product constant (K_{sp}) of barium iodate = 1.58×10^{-9}
11. Adsorption of phenol from its aqueous solution on to fly ash obeys Freundlich isotherm. At a given temperature, from 10 mg g^{-1} and 16 mg g^{-1} aqueous phenol solutions, the concentrations of adsorbed phenol are measured to be 4 mg g^{-1} and 10 mg g^{-1} , respectively. At this temperature, the concentration (in mg g^{-1}) of adsorbed phenol from 20 mg g^{-1} aqueous solution of phenol will be Use: $\log_{10} 2 = 0.3$
12. Consider a reaction $A + R \rightarrow \text{Product}$. The rate of this reaction is measured to be $k[A][R]$. At the start of the reaction, the concentration of $R, [R]_0$, is 10-times the concentration of $A, [A]_0$. The reaction can be considered to be a pseudo first order reaction with assumption that $k[R] = k'$ is constant. Due to this assumption, the relative error (in %) in the rate when this reaction is 40% complete, is
- [k and k' represent corresponding rate constants]
13. At 300 K, an ideal dilute solution of a macromolecule exerts osmotic pressure that is expressed in terms of the height (h) of the solution (density = 1.00 g cm^{-3}) where h is equal to 2.00 cm. If the concentration of the dilute solution of the macromolecule is 2.00 g dm^{-3} , the molar mass of the macromolecule is calculated to be $X \times 10^4 \text{ g mol}^{-1}$. The value of **X** is
- Use: Universal gas constant (R) = $8.3 \text{ J K}^{-1} \text{ mol}^{-1}$ and acceleration due to gravity (g) = 10 m s^{-2}

14. An electrochemical cell is fueled by the combustion of butane at 1 bar and 298 K. Its cell potential is $\frac{X}{F} \times 10^3$ volts, where F is the Faraday constant. The value of X is .

Use: Standard Gibbs energies of formation at 298 K are:

$$\Delta_f G_{\text{CO}_2}^\circ = -394 \text{ kJ mol}^{-1}; \Delta_f G_{\text{water}}^\circ = -237 \text{ kJ mol}^{-1}; \Delta_f G_{\text{butane}}^\circ = -18 \text{ kJ mol}^{-1}$$

15. The sum of the spin only magnetic moment values (in B.M.) of $[\text{Mn}(\text{Br})_6]^{3-}$ and $[\text{Mn}(\text{CN})_6]^{3-}$ is _____.
16. A linear octasaccharide (molar mass = 1024 g mol^{-1}) on complete hydrolysis produces three monosaccharides: ribose, 2-deoxyribose and glucose. The amount of 2-deoxyribose formed is 58.26% (w / w) of the total amount of the monosaccharides produced in the hydrolyzed products. The number of ribose unit(s) present in one molecule of octasaccharide is .

Use: Molar mass (in g mol^{-1}) : ribose = 150, 2-deoxyribose = 134, glucose = 180; Atomic mass (in amu): H = 1, O = 16